


BAKING MEASUREMENTS


Draw a line from the measurement on the left to the unit of measure it equals on the right.




two cups




one tablespoon




two pints



one quart



three teaspoons



one pint

CUPCAKE COUNTING



Hailey baked a batch of 12 cupcakes for her friends.

How many fewer blue cupcakes are there than pink cupcakes?

How many more yellow cupcakes are there than blue cupcakes?

If Hailey doubled her batch, how many cupcakes would she have?